

# New Trend in Music Book 1 (Teacher's Edition)

## Unit 3 Melody Is All Around      Preparatory Worksheet


Name: \_\_\_\_\_

Class: \_\_\_\_\_

Date: \_\_\_\_\_


1. Write a note on the staff following the instructions.

- (a) Fill in a minim which has a pitch a bit higher than that of first note, then show the pitches of these two notes by a line chart.



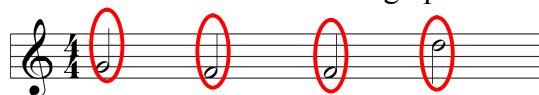
- (b) Fill in a minim which has a pitch much higher than that of first note, then show the pitches of these two notes by a line chart.

(In the same scale as question 1(a))

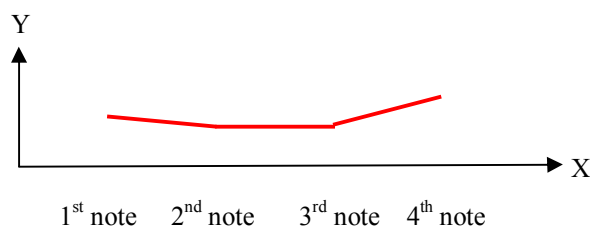


2. Fill in notes on the staff according to the following instructions.

- (a) (i) Fill in a minim on the second line of staff.  
 (ii) Fill in a minim which has a pitch a bit lower than that of the first note.  
 (iii) Fill in a minim which has a pitch equal to the pitch of the second note.  
 (iv) Fill in a minim which has a high pitch.



- (b) Show the pitches of the four notes filled in above by a line chart.



- (c) According to the figure, if the interval between two notes is very far, the line would be (parallel to X-axis / slightly slanted / very slanted). If the interval between two notes is not far, the line would be (parallel to X-axis / slightly slanted / very slanted). If the pitches of two notes are the same, the line would be (parallel to X-axis / slightly slanted / very slanted).