

# New Trend in Music **Book 1** (Teacher's Edition)

## Unit 1 You've Got Rhythm

## Preparatory Worksheet

Name: \_\_\_\_\_





























































Class: \_\_\_\_\_

Date: \_\_\_\_\_

1. Complete parts (a) and (b) below.

(a) Time value of notes

(b) Name of notes

																Semibreve																																																																																																																																																																																																																									
																( Minim )																																																																																																																																																																																																																									
																( Crotchet )																																																																																																																																																																																																																									
																( Quaver )																																																																																																																																																																																																																									
																( Semiquaver )																																																																																																																																																																																																																									
																																																																																																																																																																																																																																								( Demisemiquaver )	
Same as on the left																( Demisemiquaver )																																																																																																																																																																																																																									

2. Let's count

With reference to the time value of the following notes, fill in the brackets with correct numbers.

(a)  $\circ = ( 4 ) \text{ } \downarrow$

(b)  $\downarrow = ( 8 ) \text{ } \text{ } \downarrow$

(c)  $\downarrow = ( 1/8 ) \text{ } \circ$

(d)  $\text{ } \downarrow = ( 1/8 ) \text{ } \downarrow$

(e)  $\downarrow = ( 1/2 ) \text{ } \downarrow$

(f)  $\downarrow \cdot = ( 6 ) \text{ } \downarrow$

(g)  $\downarrow \cdot = ( 3 ) \text{ } \downarrow$

Hints: the dot attached to the note lengthens the value of the note by half.